

# Forces


Question 1: Look carefully at the activities below.  
What forces are taking place?



**Gravitational**

**Frictional**

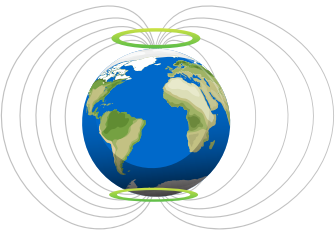
**Magnetic**



**Gravitational**

**Frictional**

**Magnetic**



**Gravitational**

**Frictional**

**Magnetic**

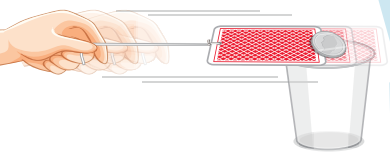


**Gravitational**

**Frictional**


**Magnetic**

Question 2: What type of forces are happening below?



**Push**

**Pull**



**Push**

**Pull**